

Alexis Richardson

For 7th Grade Math

Measuring angles with protractors

Objectives: To teach students how to measure angles using a protractor within one degree

EQ: How do you measure angles using a protractor?

Materials:

Protractors

Angles worksheet

Smartboard

LCD projector

Internet - www.amblesideprimary.com/ambleweb/mentalmaths/protractor.html

Computer

Using the internet, smartboard, and LCD projector, I would go onto the website called www.amblesideprimary.com/ambleweb/mentalmaths/protractor.html. Using that site I would introduce how to measure angles using a protractor. I would have the students come up and work on the website using the smartboard. After giving a demonstration the students would get into groups of four and work on the worksheet. Review the worksheet.

Students:

Students will come up to the smartboard during the demonstration. Afterwards the students will work in groups of four on a worksheet.

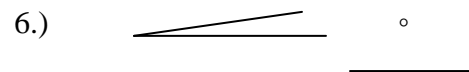

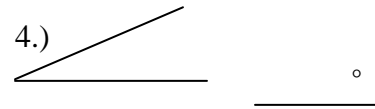
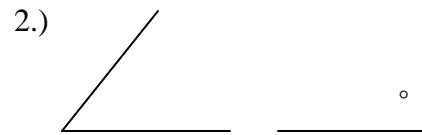
Assessment

Students will be scored 16 points for group cooperation and class participation. Each angle measure is 14 points and for every degree they are off they will two.

Name _____
Angles Worksheet

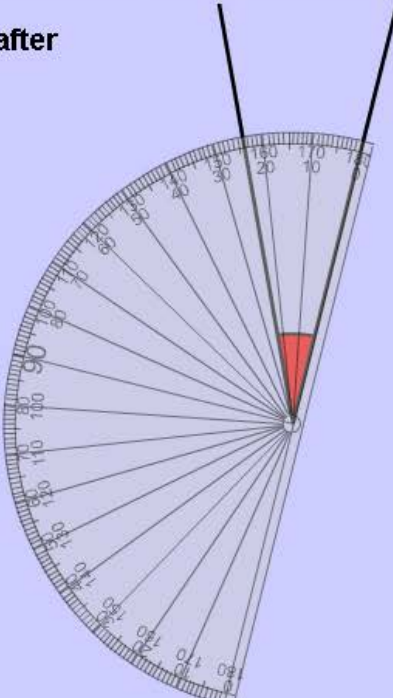
Homebase _____


Directions: Using a protractor, measure each angle.



You've got 1 correct after 7 attempts.

Up to 180 degrees in ones

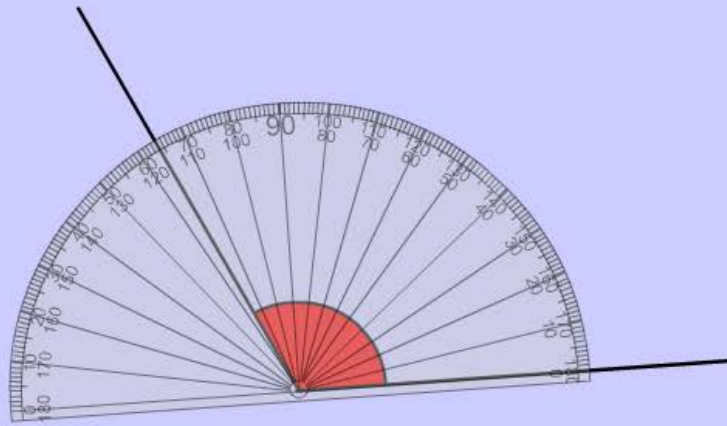


TEACHER CONTROLS **NEW ANGLE**  **TURN THE PROTRACTOR** **WELL DONE! Try another one.** **CHECK**

Copyright (c) Mark Robinson, 2000

You've got 3 correct after 10 attempts.

Up to 180 degrees in ones

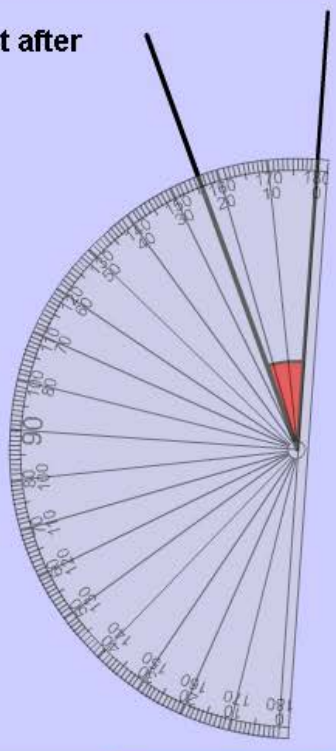


TEACHER CONTROLS NEW ANGLE 1° 5° 20° 20° 5° 1° WELL DONE! Try another one. CHECK

TURN THE PROTRACTOR
Copyright (c) Mark Robinson, 2000

You've got 2 correct after 8 attempts.

Up to 180 degrees in ones



TEACHER CONTROLS NEW ANGLE 1° 5° 20° 20° 5° 1° WELL DONE! Try another one. CHECK

TURN THE PROTRACTOR
Copyright (c) Mark Robinson, 2000